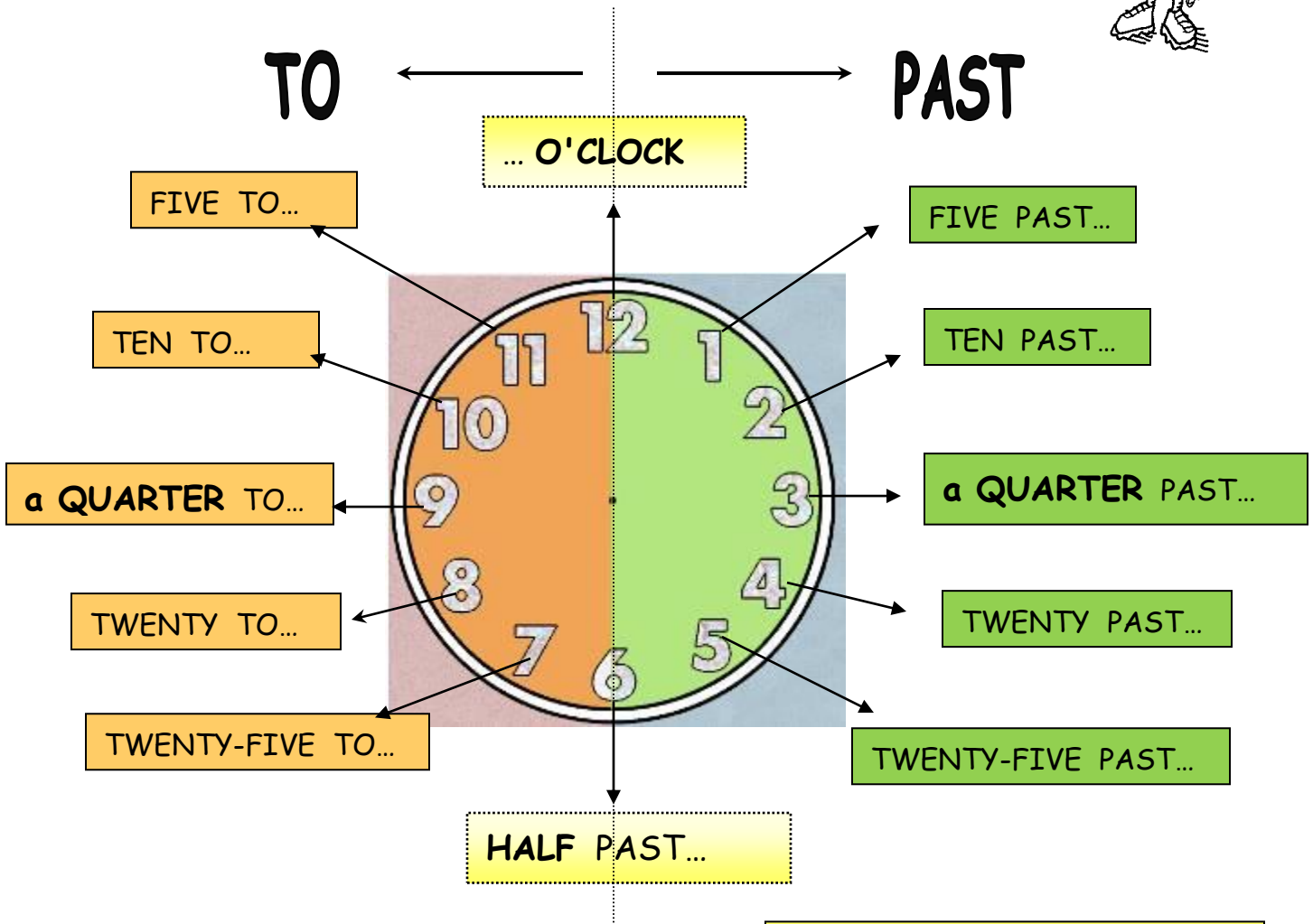


WHAT'S THE TIME?




15 minutes = a quarter
30 minutes = half

REMEMBER!
a.m.- in the morning
p.m.-in the afternoon ,in the evening

6.00 -	It's six o'clock	6.35 -	It's twenty-five to seven
6.05 -	It's five past six	6.40 -	It's twenty to seven
6.10 -	It's ten past six	6.45 -	It's a quarter to seven
6.15 -	It's a quarter past six	6.50 -	It's ten to seven
6.20 -	It's twenty past six	6.55 -	It's five to seven
6.25 -	It's twenty-five past six	7.00 -	It's seven o'clock
6.30 -	It's half past six		

It's your turn now.
What's the time?



It's _____



It's _____



It's _____



It's _____



It's _____



It's _____



It's _____



It's _____



It's _____



It's _____



It's _____

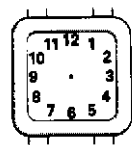


It's _____

Draw :



It's quarter to two



It's half past one



It's twenty to eleven



It's ten past three



It's nine o'clock



It's quarter past
three



It's ten to ten



It's twenty-seven
past twelve